

Meurea

CE1

...../...../.....
PRÉNOM :



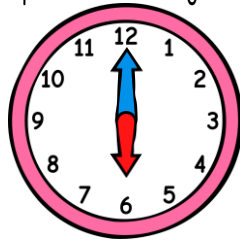
① Réponds à cette devinette.

Le cours de boxe de Lilou a commencé à 17h30. Il dure 60 min. À quelle heure se finira-t-il ?

② Écris l'heure sous chaque horloge.



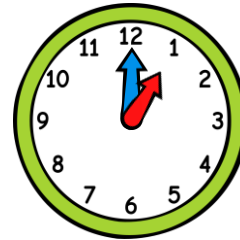
h h



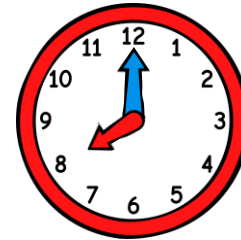
h h



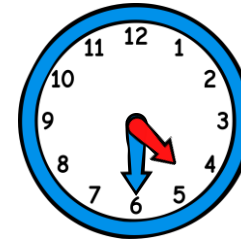
h h



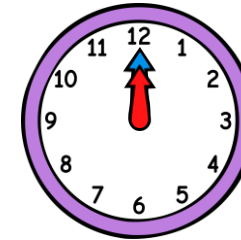
h h



h h



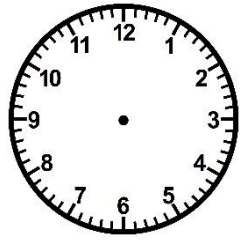
h h



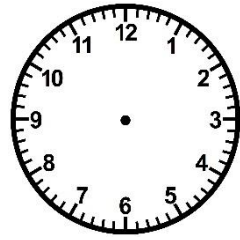
h h

③ Trace les aiguilles (rouge pour les heures, bleue pour les minutes).

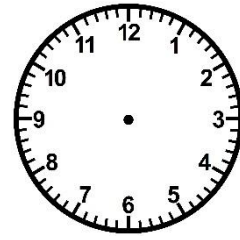
<https://laclassbleue.fr/>




5 h 00



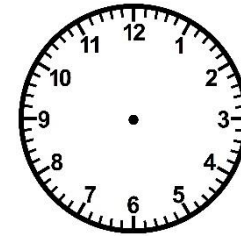
7 h 30




14 h 00



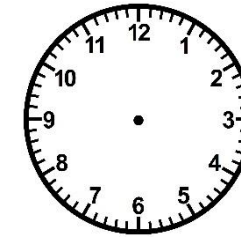
9 h 00



23 h 30



19 h 00



12 h 30