

# Measures

CE1

...../...../.....

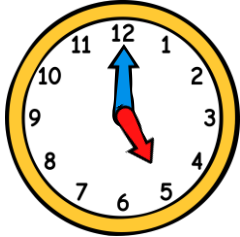
PRÉNOM : .....



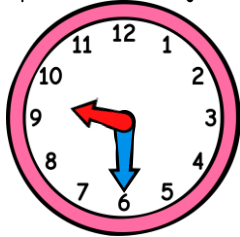
① Colorie la bonne unité de durée.

la récréation ⇒ jours heures minutes | une nuît de sommeil ⇒ jours heures minutes

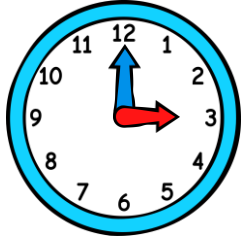
② Écris l'heure sous chaque horloge.



h h



h h



h h



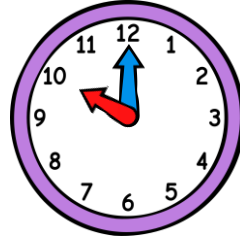
h h



h h



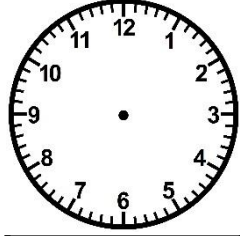
h h



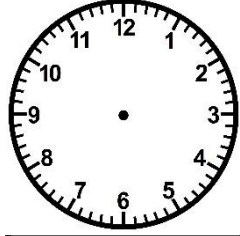
h h

③ Trace les aiguilles (rouge pour les heures, bleue pour les minutes).

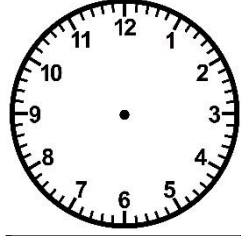
<https://laclassbleue.fr/>



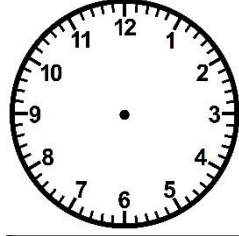
2 h 30



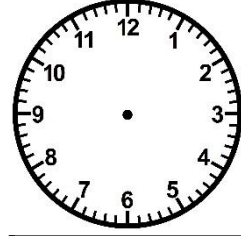
8 h 00



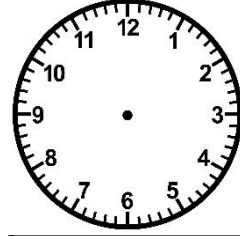
13 h 00



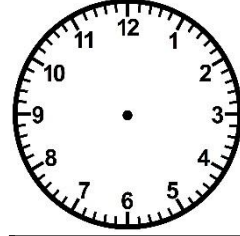
22 h 30



6 h 00



17 h 30



11 h 30