

# Meurea

CE1

..... / ..... / .....

PRÉNOM : .....



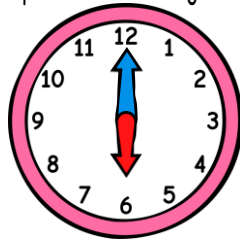
① Réponds à cette devinette.

Le cours de boxe de Lilou a commencé à 17h30. Il dure 60 min. À quelle heure se finira-t-il ?

② Écris l'heure sous chaque horloge.



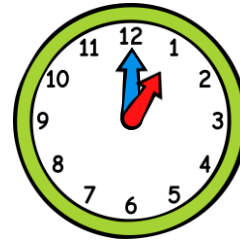
2h30 14h30



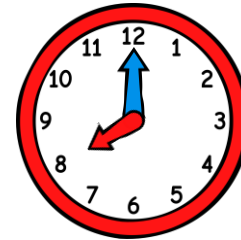
6h00 18h00



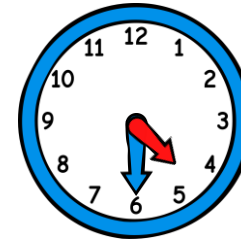
10h30 22h30



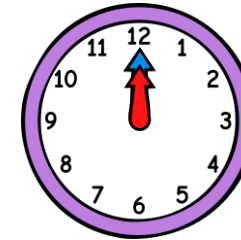
1h00 13h00



8h00 20h00



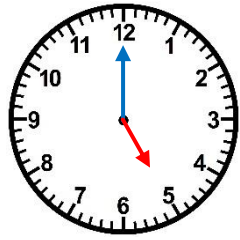
4h30 16h30



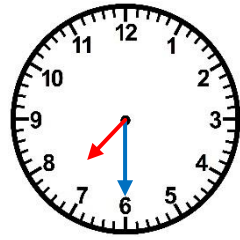
0h00 12h00

③ Trace les aiguilles (rouge pour les heures, bleue pour les minutes).

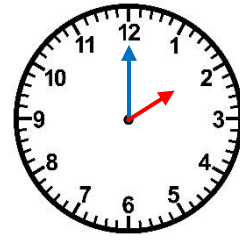
<https://laclassbleue.fr/>



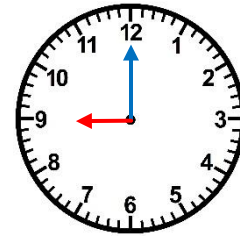
5 h 00



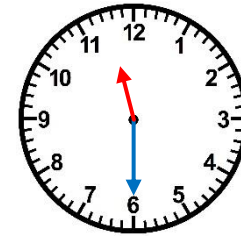
7 h 30



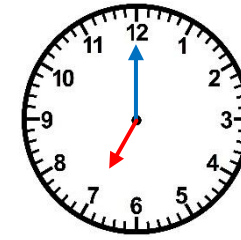
14 h 00



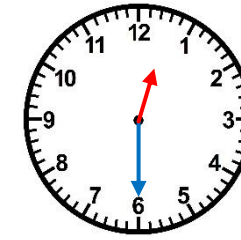
9 h 00



23 h 30



19 h 00



12 h 30