

Measures

CE1

...../...../.....
PRÉNOM :



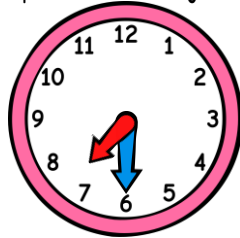
① Complète avec les mots « mois », « jours » ou « heures ».

1 année = 12 _____ | 1 mois = 28, 29, 30 ou 31 _____ | 1 jour = 24 _____

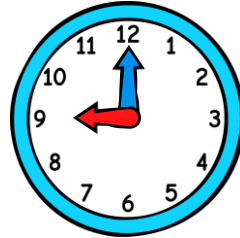
② Ecris l'heure sous chaque horloge.



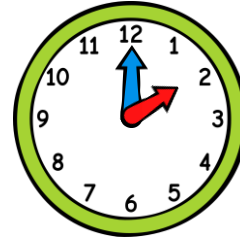
h h



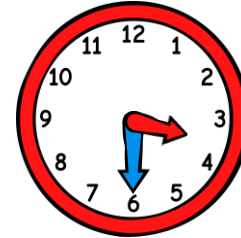
h h



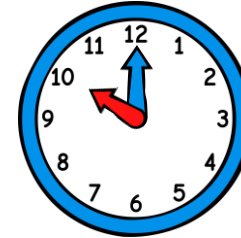
h h



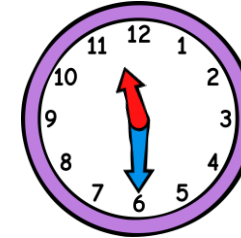
h h



h h



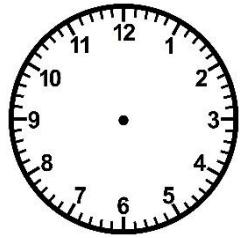
h h



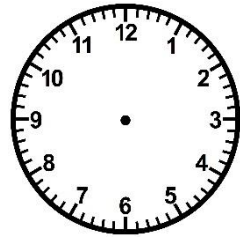
h h

③ Trace les aiguilles (rouge pour les heures, bleue pour les minutes).

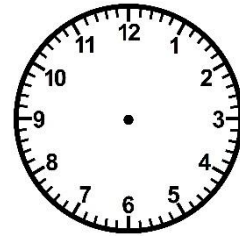
<https://laclassbleue.fr/>



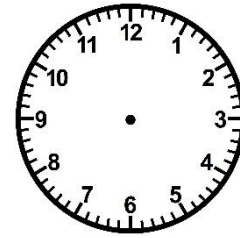
6 h 00



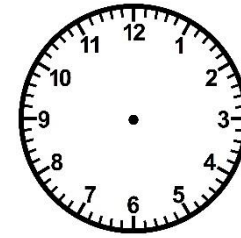
1 h 30



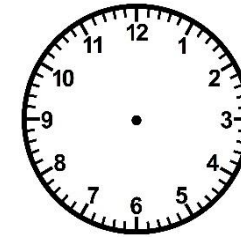
8 h 00




5 h 30



12 h 00



9 h 30



7 h 00

Measures

CE1

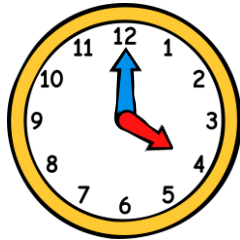
...../...../.....
PRÉNOM :



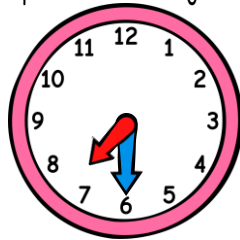
① Complète avec les mots « mois », « jours » ou « heures ».

1 année = 12 mois | 1 mois = 28, 29, 30 ou 31 jours | 1 jour = 24 heures

② Ecris l'heure sous chaque horloge.



4h00 16h00



7h30 19h30



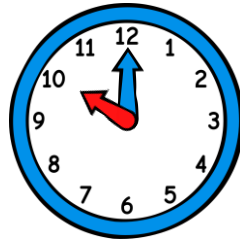
9h00 21h00



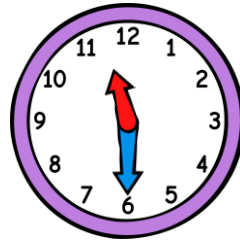
2h00 14h00



3h30 15h30



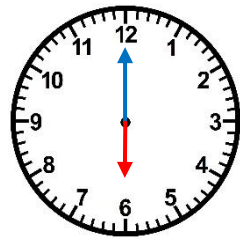
10h00 22h00



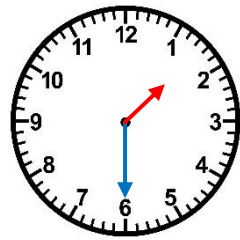
11h30 23h30

③ Trace les aiguilles (rouge pour les heures, bleue pour les minutes).

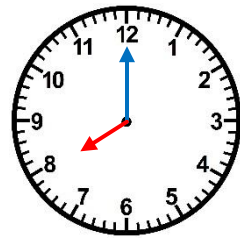
<https://laclassbleue.fr/>



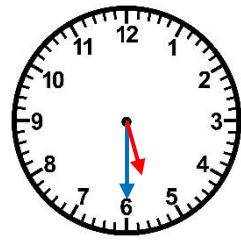
6 h 00



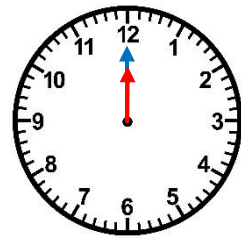
1 h 30



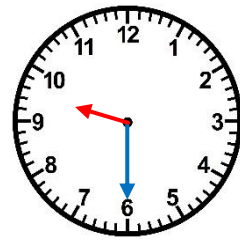
8 h 00



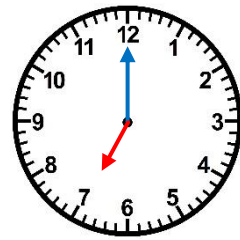
5 h 30



12 h 00



9 h 30



7 h 00