


Measures

CE1

...../...../.....


PRÉNOM :

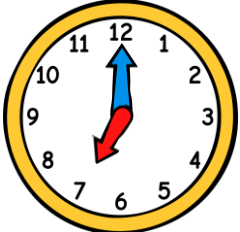
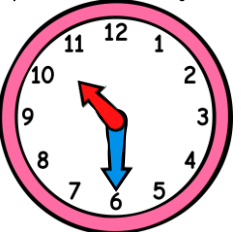
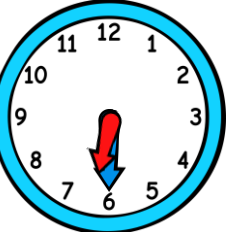
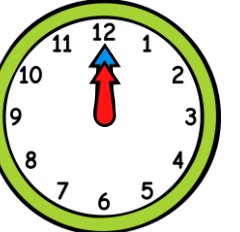

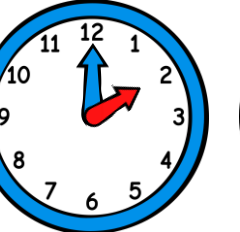
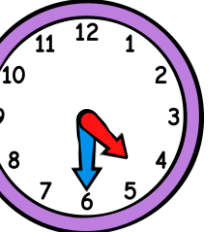


① Colorie la bonne unité de durée.


prendre une douche ⇒ jours heures minutes | des vacances à la mer ⇒ jours heures minutes

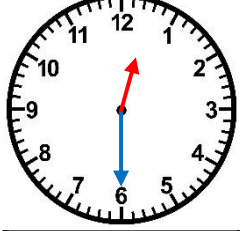
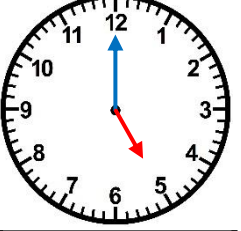
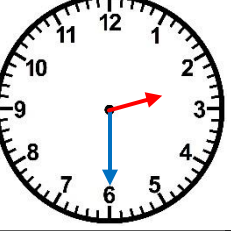
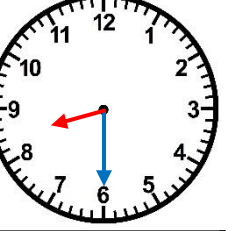
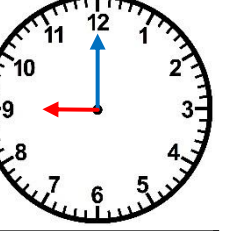
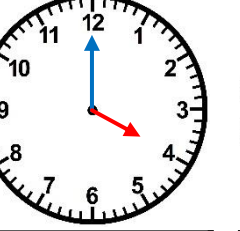
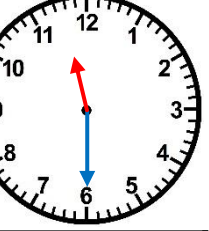
② Ecris l'heure sous chaque horloge.



						
7h00 19h00	10h30 22h30	6h30 18h30	0h00 12h00	9h30 21h30	2h00 14h00	4h30 16h30

③ Trace les aiguilles (rouge pour les heures, bleue pour les minutes).



						
12 h 30	5 h 00	2 h 30	8 h 30	21 h 00	16 h 00	23 h 30

<https://laclassobleue.fr/>