


# Measures

CE1

...../...../.....


PRÉNOM : .....

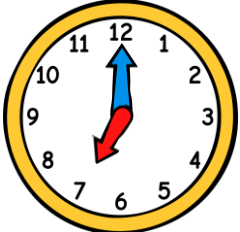
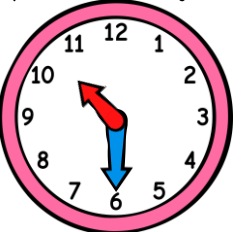
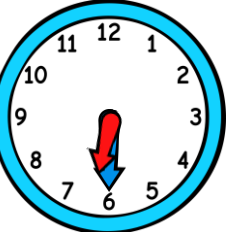
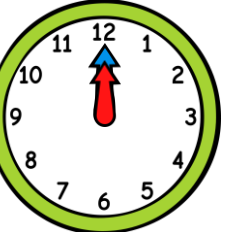

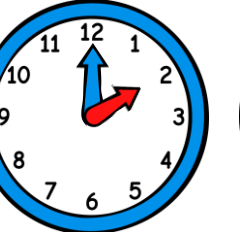
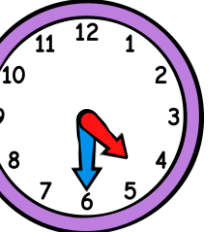


① Colorie la bonne unité de durée.


prendre une douche ⇒ jours heures minutes | des vacances à la mer ⇒ jours heures minutes


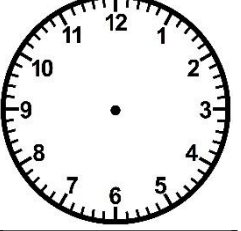
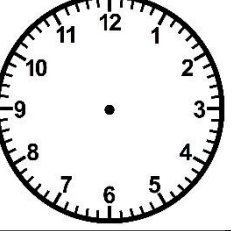
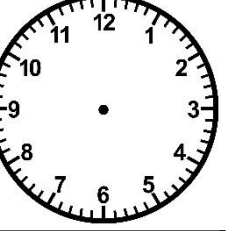
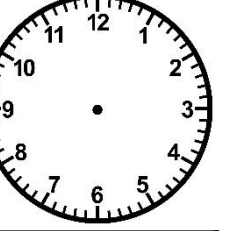
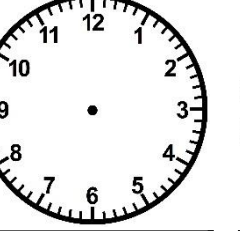

② Ecris l'heure sous chaque horloge.



						
<u>h</u> <u>h</u>	<u>h</u> <u>h</u>	<u>h</u> <u>h</u>	<u>h</u> <u>h</u>	<u>h</u> <u>h</u>	<u>h</u> <u>h</u>	<u>h</u> <u>h</u>

③ Trace les aiguilles (rouge pour les heures, bleue pour les minutes).



						
<u>6 h 00</u>	<u>1 h 30</u>	<u>8 h 00</u>	<u>5 h 30</u>	<u>12 h 00</u>	<u>9 h 30</u>	<u>7 h 00</u>

<https://laclassobleue.fr/>