


Measures

CE1

..... / /

PRÉNOM :



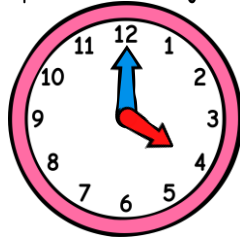
① Complète avec les mots « jours », « heures » ou « minutes ».

se brosser les dents ⇒ 3 _____ | un week-end ⇒ 2 _____ | un film au cinéma ⇒ 2 _____

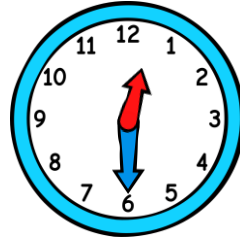
② Ecris l'heure sous chaque horloge.



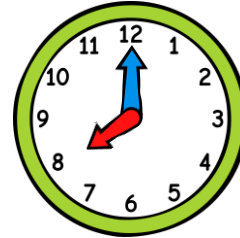
h h



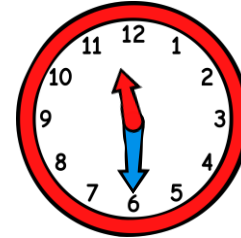
h h



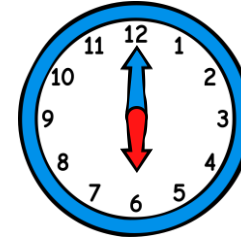
h h



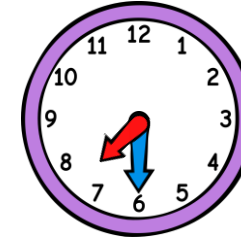
h h



h h



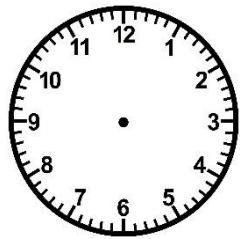
h h



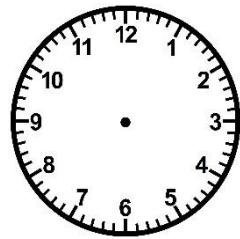
h h

<https://laclassbleue.fr/>

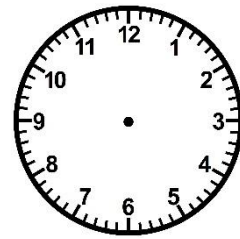
③ Trace les aiguilles (rouge pour les heures, bleue pour les minutes).



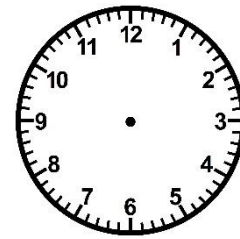
15 h 00



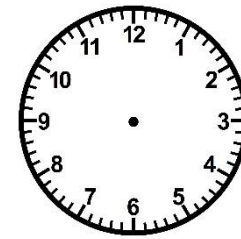
9 h 30



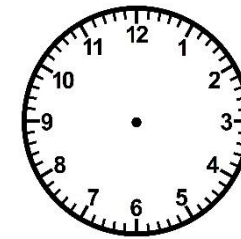
22 h 00




7 h 00



16 h 30



20 h 30




13 h 00

Meures

CE1

..... / /

PRÉNOM :

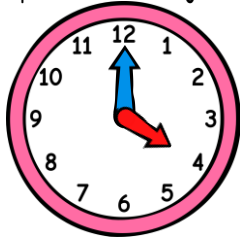


① Complète avec les mots « jours », « heures » ou « minutes ».
se brosser les dents ⇒ 3 minutes | un week-end ⇒ 2 jours | un film au cinéma ⇒ 2 heures

② Ecris l'heure sous chaque horloge.



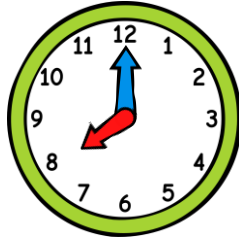
1h30 13h30



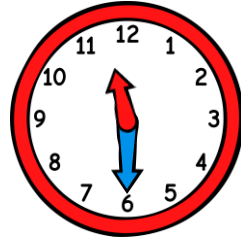
4h00 16h00



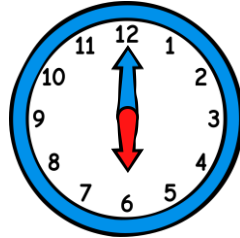
0h30 12h30



8h00 20h00



11h30 23h30



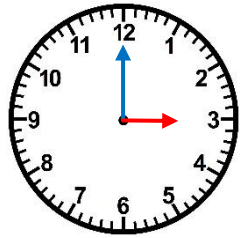
6h00 18h00



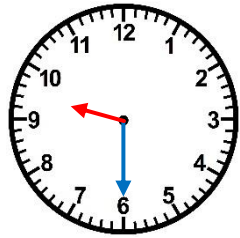
7h30 19h30

③ Trace les aiguilles (rouge pour les heures, bleue pour les minutes).

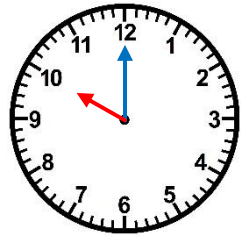
<https://laclassbleue.fr/>



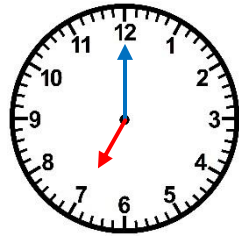
15 h 00



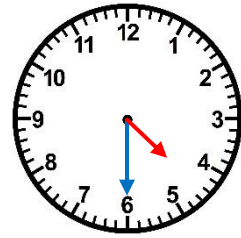
9 h 30



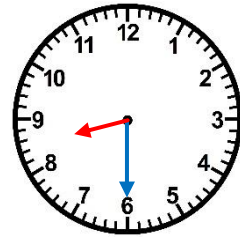
22 h 00



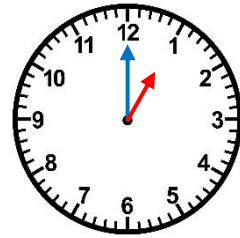
7 h 00



16 h 30



20 h 30



13 h 00