





# Lire l'heure... (03)


- La petite aiguille indique **les heures (h)**.
- La grande aiguille indique **les minutes (min)**.
- Quelle heure est-il ?




8h00 ou 20h00




4h00 ou 16h00



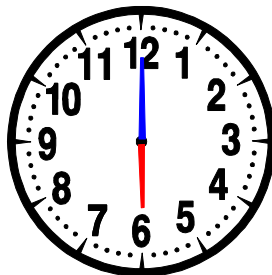
11h00 ou 23h00




12h00 ou 24h00




9h00 ou 21h00



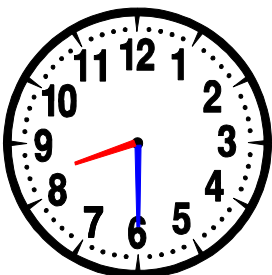
6h00 ou 18h00




2h00 ou 14h00




5h00 ou 17h00




8h30 ou 20h30



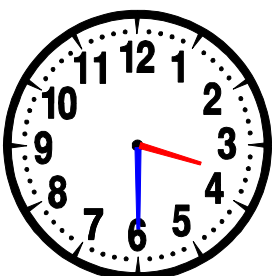
9h30 ou 21h30




2h30 ou 14h30




12h30 ou 0h30



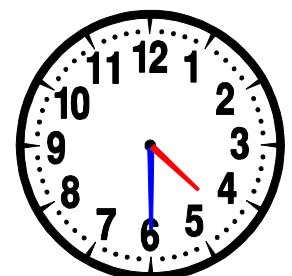
3h30 ou 15h30



11h30 ou 23h30



1h30 ou 13h30



4h30 ou 16h30